




ZONAL EDUCATION OFFICE, VADAMARADCHY
Second Term Examination
Information & Communication Technolghy
Grade: 6 **Time: 2 Hours**

Part I

Answer all questions.

Underline the correct answer.

- 1) Which of the following is suitable for indicating the letter A?
1) Data 2) processing 3) information 4) Instruction
- 2) Which of the following is an Input device?
1) Monitor 2) keyboard 3) printer 4) speaker
- 3) One of the Input and Output device is?
1) Mouse 2) keyboard 3) printer 4) touchscreen
- 4) Which of the following is a non- volatile memory?
1) ROM 2) RAM 3) CPU 4) pen drive
- 5) What is the expansion of NIC?
1) Network Interchange Card 2) Network Interact Card
3) Network Interface Card 4) Network Intern Card
- 6) The process of transferring the waste to a new product is called as?
1) Recycling 2) Reuse 3) Reduce 4) None of the above
- 7) How many minimum characters should be in a password?
1) Five 2) ten 3) twelve 4) eight
- 8) What is the file extension for Zonal.docx?
1) Zonal 2) Zonal.docx 3) .docx 4) doc
- 9) Which of the following is the example of an Operating System?
1) keyboard 2) Ms Word 3) Windows 4) Ms Excel
- 10)  This button is used for.....
1) minimize 2) maximize 3) close 4) resize
- 11) Which file name is incorrect?
1) mala.docx 2) raja.xls 3) ravi.ppt 4) mala;sa.docx
- 12) What is the short cut key for save?
1) Ctrl+X 2) Ctrl+V 3) Ctrl+C 4) Ctrl+S

13) Which of the following is a bridge that connects the user and the computer?
1) Software 2) Hardware 3) Operating System 4) All of the above

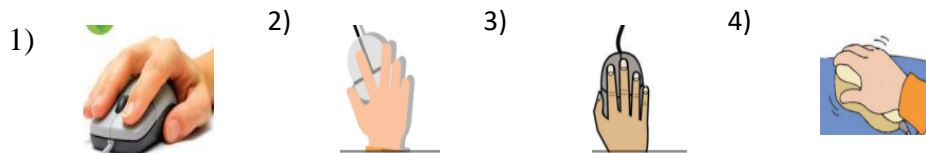
14) An example of application software is.....?
1) windows 2) Operating System 3) Hardware 4) Ms Word


15) Which key is used to insert a large space between words?
1) Tab key 2)Space bar 3) Shift key 4) backspace

16) Which of the following is the Graphical software?
1) 1) Ms Word 2) Ms Excel 3) Ms Powerpoint 4) Ms Paint

17) Which software is used to create and print the letter?
1) Graphical software 2) Ms Word 3) Ms Excel 4) Ms Powerpoint

18) Which picture is the correct for handling the mouse properly?



19)  This symbol is suitable for operating system?

- 1) Windows 2) Linux 3) Ubuntu 4) Android

20) What is the tool used to delete unwanted part of a picture in Graphical software?



(2 X 20=40 marks)

Part II

Answer first questions and any other two questions.

01) Fill in the blanks using the given words.

(credit card, password, handling the file, Audacity, Adobe Premiere Pro, web browser, brain swelling, washing machine, router, 45cm-75cm space between eyes and monitor)

- 1) One of the communication device is
- 2) is used to purchase and sale goods.
- 3) is an example for embedded computer system.
- 4) The correct posture when using the computer is
- 5) is one of the illness that can be cause due to electronic wastage.
- 6) can be used as the secret word to protect the stored information in the computer.
- 7) The main function of the Operating System is
- 8) is used to search information in Internet.
- 9) An example of the audio editing software is
- 10) An example of the video editing software is

(2 X 10=20 marks)

02) Answer the following questions.

- 1) Write four safety measures you can follow in a computer laboratory? (8 marks)
- 2) Give three Input devices? (6 Marks)
- 3) Write the shortcut key of the following?
 - a. paste
 - b. Open
 - c. Cut (6 marks)

03) Answer the following questions.

- 1) Give two computer ethics? (4 marks)
- 2) Give four activities using the computer? (12 marks)
- 3) Give two examples for special usage software? (4 marks)


04) I) Name the storage devices shown below.



A



B



C



D

A
B
C
D (4 X 2= 8 marks)

II) Name the devices shown below.



A



B



C



D



E



F

A
B
C
D
E
F

(6X2=12 marks)